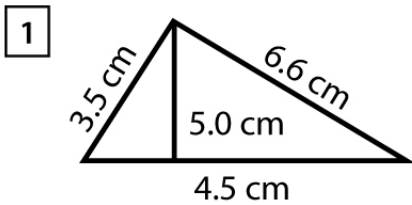


Name : _____

Score : _____ Date : _____

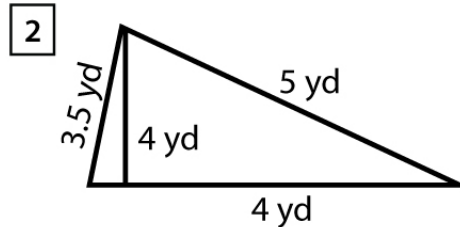
Identify the Type, Area and Perimeter for each Triangle



Type = _____

Area = _____

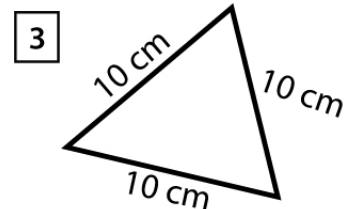
Perimeter = _____



Type = _____

Area = _____

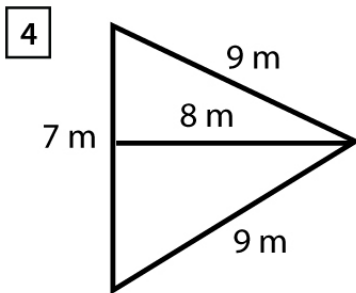
Perimeter = _____



Type = _____

Area = _____

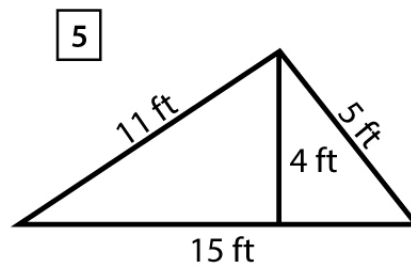
Perimeter = _____



Type = _____

Area = _____

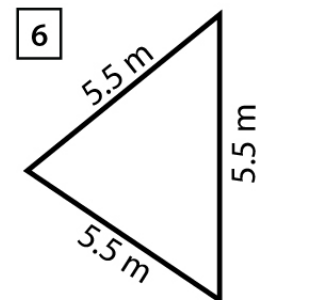
Perimeter = _____



Type = _____

Area = _____

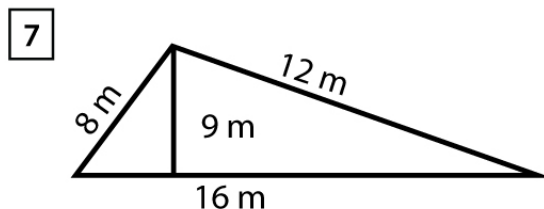
Perimeter = _____



Type = _____

Area = _____

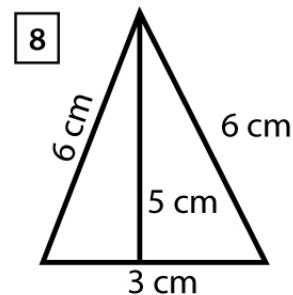
Perimeter = _____



Type = _____

Area = _____

Perimeter = _____



Type = _____

Area = _____

Perimeter = _____