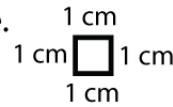


Name : \_\_\_\_\_

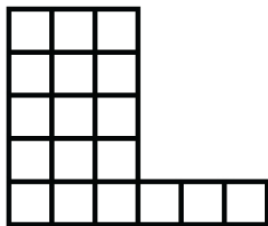
Score : \_\_\_\_\_ Date : \_\_\_\_\_

**Perimeter: Counting Unit Squares**

The side length of each square is 1 cm. Calculate the perimeter of each shape.

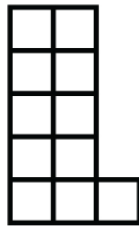


1



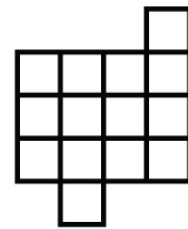
Perimeter = \_\_\_\_\_ cm

2




Perimeter = \_\_\_\_\_ cm

3



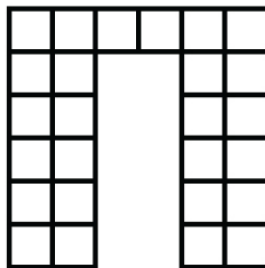
Perimeter = \_\_\_\_\_ cm

4



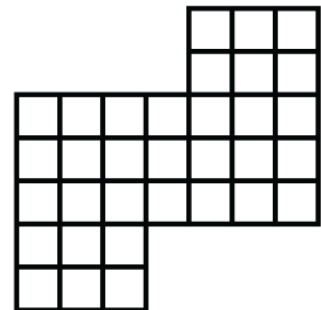
Perimeter = \_\_\_\_\_ cm

5



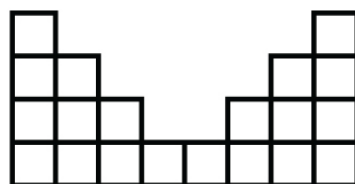
Perimeter = \_\_\_\_\_ cm

6




Perimeter = \_\_\_\_\_ cm

7



Perimeter = \_\_\_\_\_ cm

8



Perimeter = \_\_\_\_\_ cm