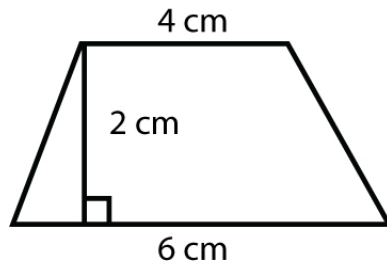


Name : _____

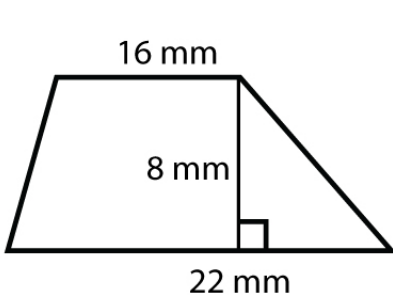
Score : _____ Date : _____

Finding the Area of the Trapezoid Worksheet

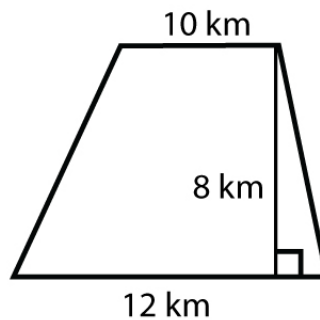
Solved:



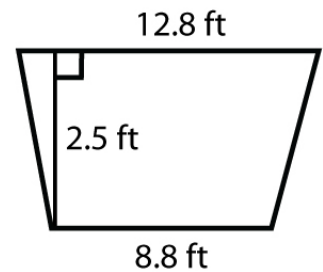
$$\begin{aligned} \text{Area} &= \frac{1}{2} h (a+b) \\ &= \frac{1}{2} \times 2 \text{ cm} (2 \text{ cm} + 6 \text{ cm}) \\ &= \frac{1}{2} \times 2 \text{ cm} \times 8 \text{ cm} = 8 \text{ cm}^2 \end{aligned}$$



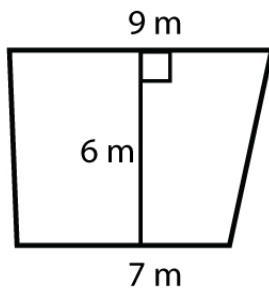
Area = _____



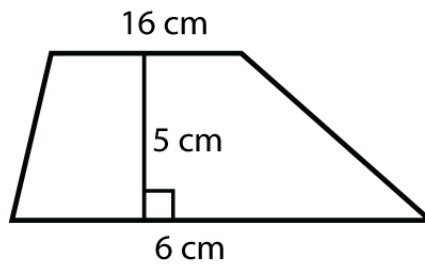
Area = _____



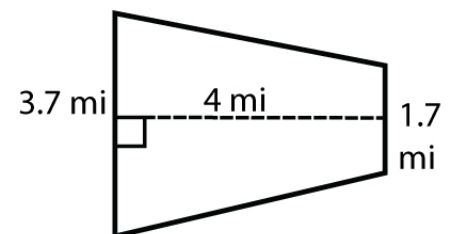
Area = _____



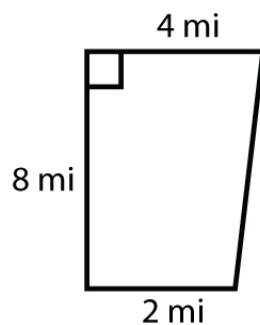
Area = _____



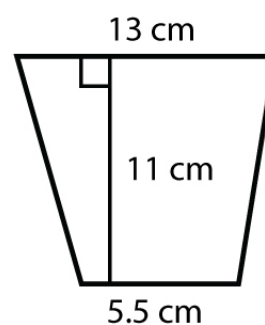
Area = _____



Area = _____



Area = _____



Area = _____