



Name : \_\_\_\_\_

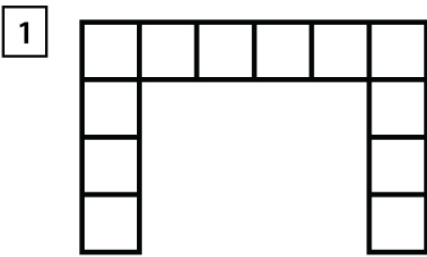
Score : \_\_\_\_\_ Date : \_\_\_\_\_

**Finding the Area in Square Units**

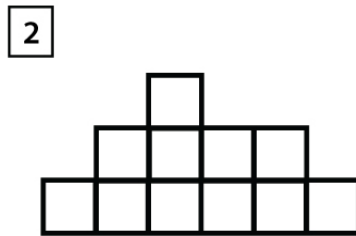
Direction: Count the number of unit squares .

Each unit square  = 1 m<sup>2</sup>

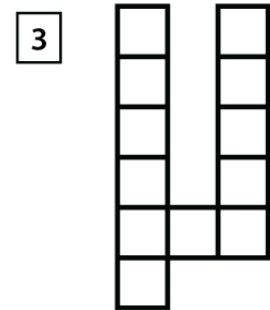
Solved :  = 12 m<sup>2</sup>



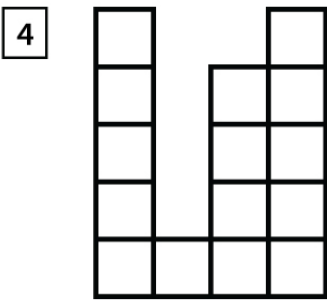
= \_\_\_\_\_ m<sup>2</sup>



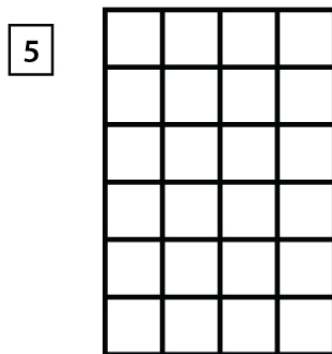
= \_\_\_\_\_ m<sup>2</sup>



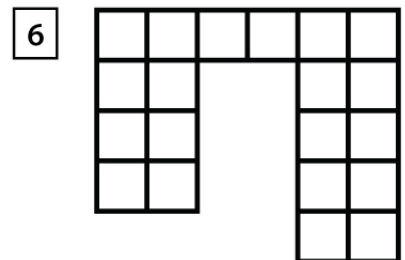
= \_\_\_\_\_ m<sup>2</sup>



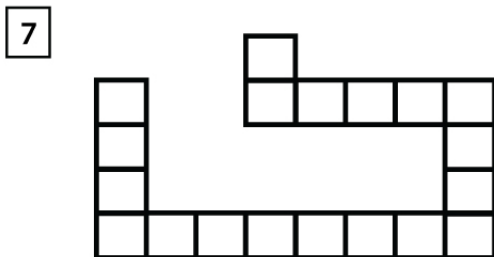
= \_\_\_\_\_ m<sup>2</sup>



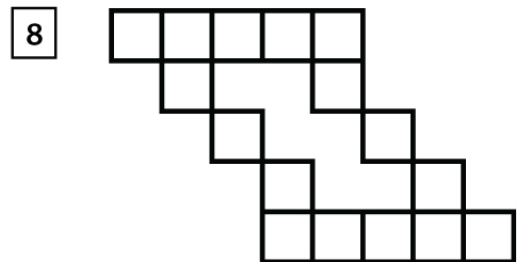
= \_\_\_\_\_ m<sup>2</sup>



= \_\_\_\_\_ m<sup>2</sup>



= \_\_\_\_\_ m<sup>2</sup>



= \_\_\_\_\_ m<sup>2</sup>