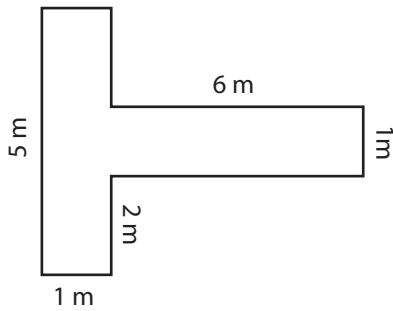


**Area and Perimeter of Paths**

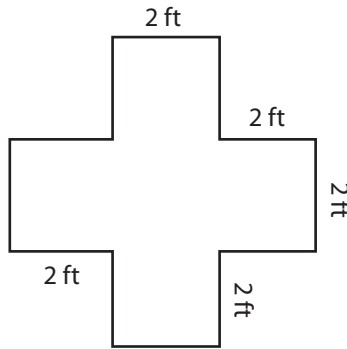
Find the area and perimeter of each shape.

1)



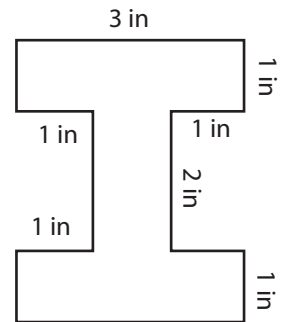
Area: \_\_\_\_\_  
Perimeter: \_\_\_\_\_

2)



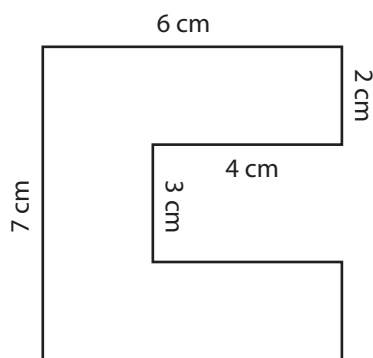
Area: \_\_\_\_\_  
Perimeter: \_\_\_\_\_

3)



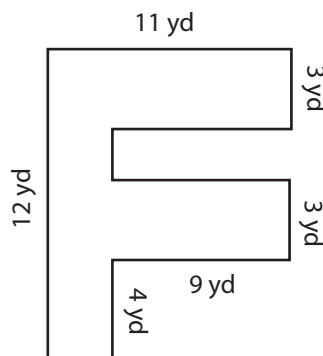
Area: \_\_\_\_\_  
Perimeter: \_\_\_\_\_

4)



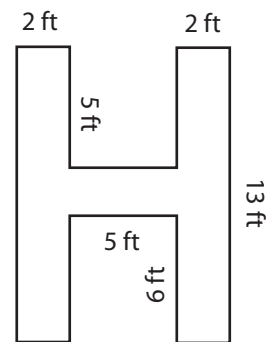
Area: \_\_\_\_\_  
Perimeter: \_\_\_\_\_

5)



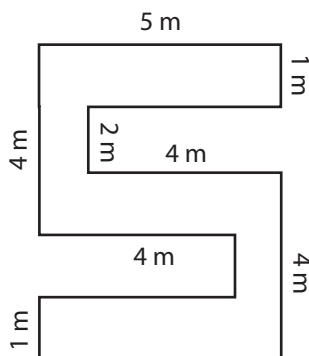
Area: \_\_\_\_\_  
Perimeter: \_\_\_\_\_

6)



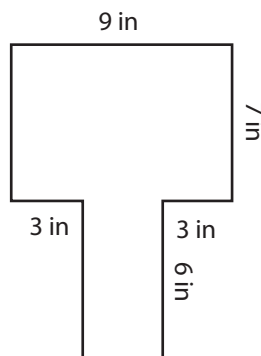
Area: \_\_\_\_\_  
Perimeter: \_\_\_\_\_

7)



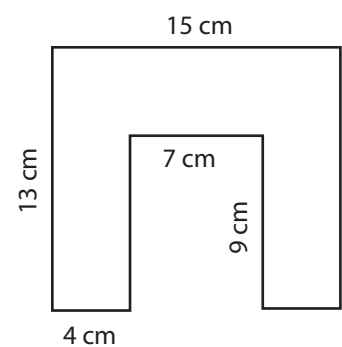
Area: \_\_\_\_\_  
Perimeter: \_\_\_\_\_

8)



Area: \_\_\_\_\_  
Perimeter: \_\_\_\_\_

9)



Area: \_\_\_\_\_  
Perimeter: \_\_\_\_\_