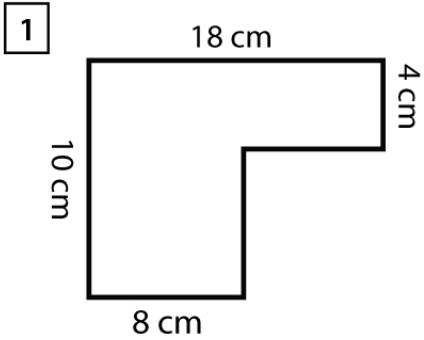


Name : _____

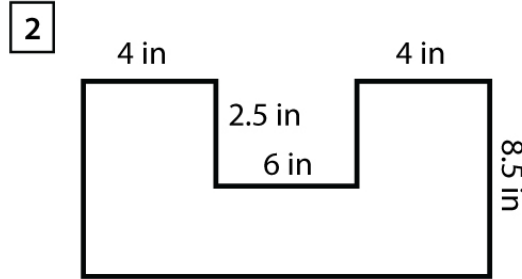
Score : _____ Date : _____

Finding Area and Perimeter of Irregular Polygons Worksheet



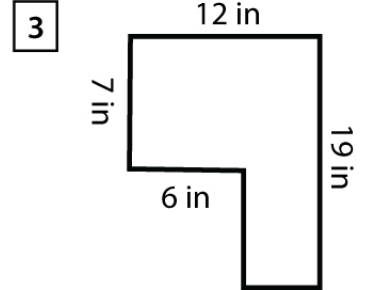
Area = _____

Perimeter = _____



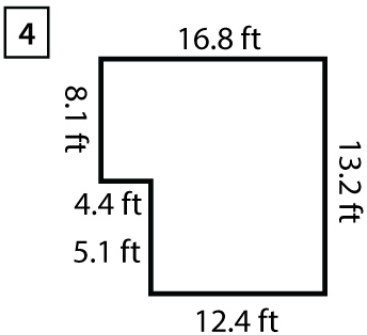
Area = _____

Perimeter = _____



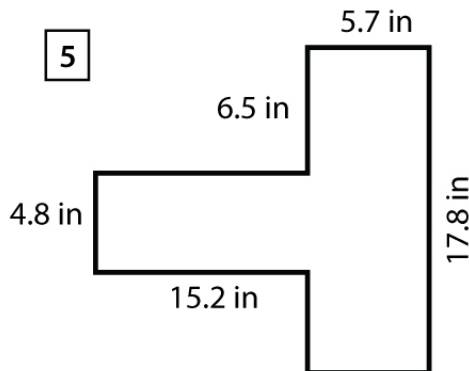
Area = _____

Perimeter = _____



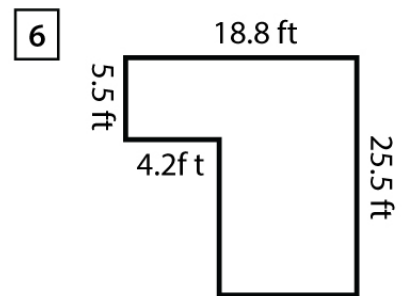
Area = _____

Perimeter = _____



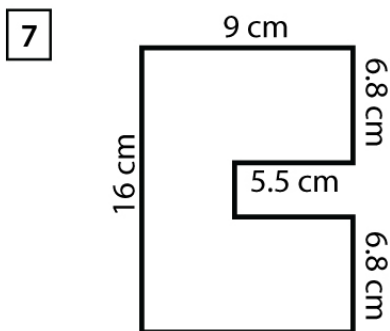
Area = _____

Perimeter = _____



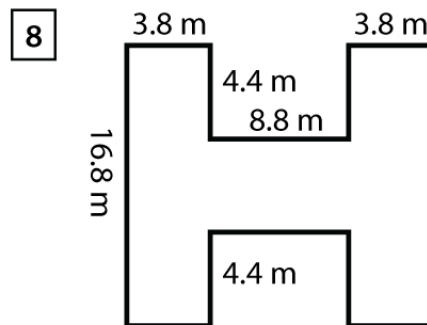
Area = _____

Perimeter = _____



Area = _____

Perimeter = _____



Area = _____

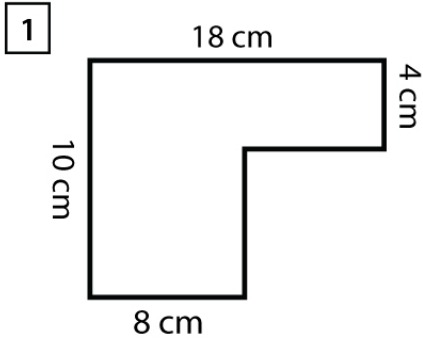
Perimeter = _____

Name : _____

Score : _____ Date : _____

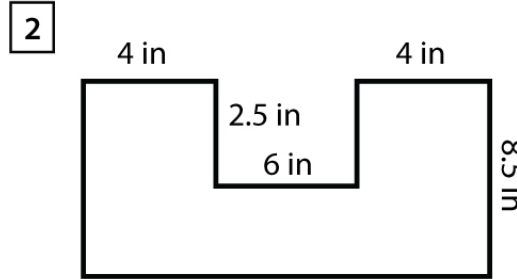
Finding Area and Perimeter of Irregular Polygons Worksheet

Answers



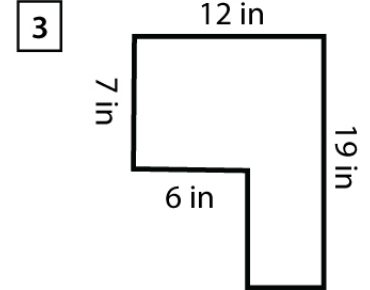
Area = 120 cm²

Perimeter = 56 cm



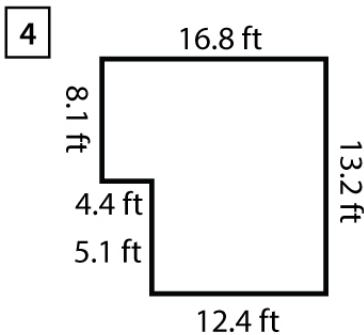
Area = 104 in²

Perimeter = 50 in



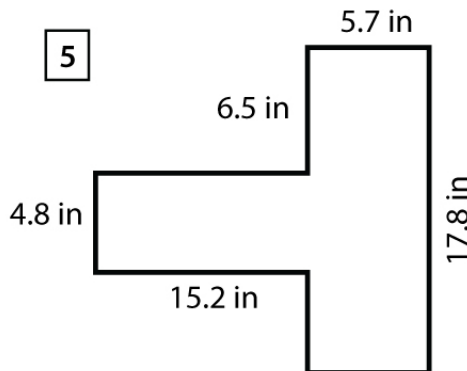
Area = 156 in²

Perimeter = 62 in



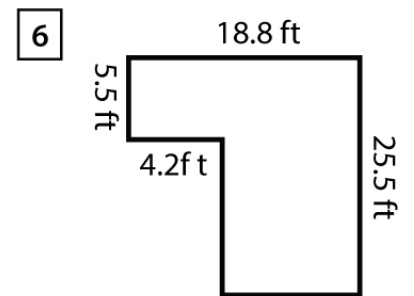
Area = 199.32 ft²

Perimeter = 60 ft



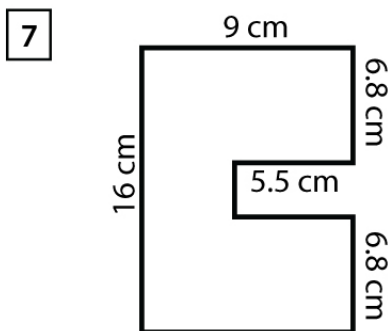
Area = 174.42 in²

Perimeter = 77.4 in



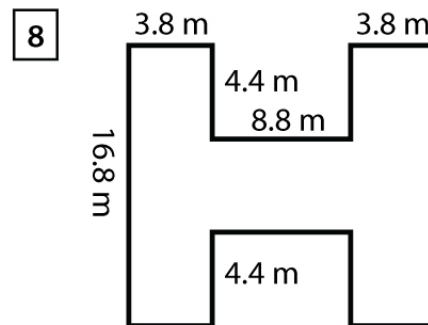
Area = 395.4 ft²

Perimeter = 88.6 ft



Area = 130.8 cm²

Perimeter = 61 cm



Area = 197.72 m²

Perimeter = 84 m